



# Function machines

1. This function machine is set to do multiplications today. Can you complete the table?

In	Function	Out
5	$\times 4$	
6	$\times 3$	
8	$\times 5$	
	$\times 10$	70
	$\times 2$	16
	$\times 6$	48
4	$\times 9$	
	$\times 7$	42
	$\times 4$	52
12	$\times 6$	
	$\times 9$	171
	$\times 8$	656
17	$\times 5$	




2.



What function is this machine set to do?

In	Out
101	81
49	29
150	130

3.



Choose a function for this machine.

In	Out



I can enter different values into a function machine and work out the outputs

